

Session 2013-2014

Worksheet No. 1

Term : First


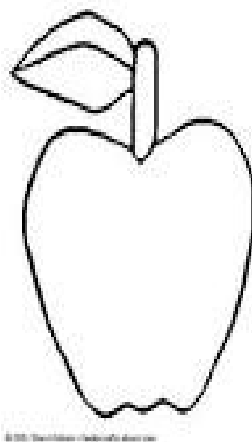

Subject : Maths

Name Date : Class/Sec: I,

Q1. Tick the taller and encircle the shorter figure given below:




Q2. Colour the biggest object with blue and smallest with green.





Q3. Shade the longer object with blue and shorter with red.



Q4. Tick the thicker object and cross the thinner object.

