






THE AIR FORCE SCHOOL
CLASS I MATHS HW WORKSHEET
SUBMISSION DATE: 8 AUGUST 2014




ADDITION: COUNTING TOGETHER




Count them together to find the answer:




$$\begin{array}{r} 6 \\ + 5 \\ \hline \end{array}$$







$$\begin{array}{r} 9 \\ + 4 \\ \hline \end{array}$$




$$\begin{array}{r} 8 \\ + 8 \\ \hline \end{array}$$







$$\begin{array}{r} 10 \\ + 6 \\ \hline \end{array}$$




$$\begin{array}{r} 9 \\ + 7 \\ \hline \end{array}$$






$$\begin{array}{r} 8 \\ + 9 \\ \hline \end{array}$$




$$\begin{array}{r} 7 \\ + 8 \\ \hline \end{array}$$




$$\begin{array}{r} 11 \\ + 7 \\ \hline \end{array}$$




$$\begin{array}{r} 12 \\ + 4 \\ \hline \end{array}$$

$$\begin{array}{r} 14 \\ + 5 \\ \hline \end{array}$$
