

## CHAPTER 12

Ques.1

$$\begin{array}{c} 1 \\ \text{Rupee} \end{array} \quad \begin{array}{c} 50 \\ \text{paise} \end{array} + \underline{\hspace{2cm}}$$

Ques.2

$$\boxed{100 \text{ Rs}} = \boxed{20 \text{ Rs}} + \boxed{20 \text{ Rs}} + \boxed{\phantom{00}} + \boxed{50 \text{ Rs.}}$$

Ques.3

$$\begin{array}{c} 32 \\ \text{Rupees} \end{array} + \boxed{20} + \boxed{\phantom{00}} + \bigcirc$$

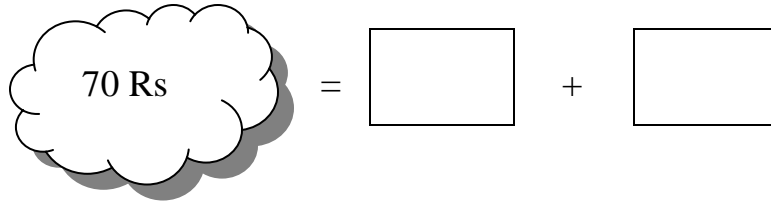
Ques.4

$$\begin{array}{c} 1 \\ \text{Rupees} \end{array} + \begin{array}{c} 1 \\ \text{Rupees} \end{array} + \begin{array}{c} 2 \\ \text{Rupees} \end{array} + \begin{array}{c} 1 \\ \text{Rupees} \end{array} = \bigcirc$$

Ques.5

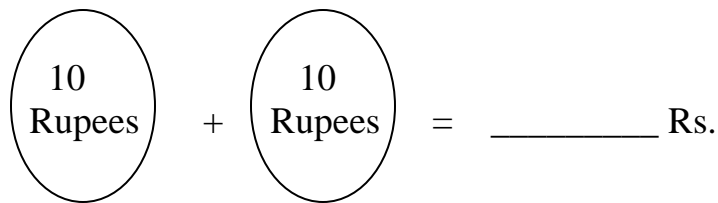
$$\boxed{50 \text{ Rs}} = \boxed{20 \text{ Rs}} + \boxed{\phantom{00}} + \boxed{\phantom{00}}$$

Ques.6



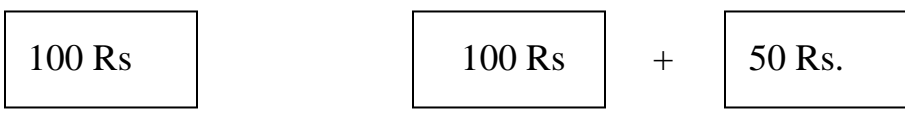
$$70 \text{ Rs} = \boxed{\phantom{00}} + \boxed{\phantom{00}}$$

Ques.7



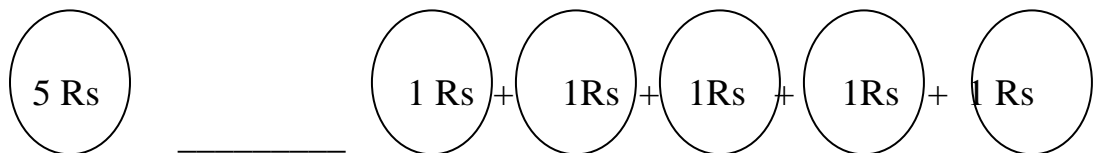
$$10 \text{ Rupees} + 10 \text{ Rupees} = \underline{\hspace{2cm}} \text{ Rs.}$$

Ques.8 Which is greater in amount put sign  $>$ ,  $<$ ,  $=$ .  
इनमें से कौन सी राशि अधिक है निशान लगाइए। $<$ ,  $>$

A) 

$$100 \text{ Rs} \quad \underline{\hspace{2cm}} \quad 100 \text{ Rs} + 50 \text{ Rs.}$$

Ques.9 Put the sign  $<$ ,  $>$ ,  $=$ .  
 $>$ ,  $<$  उचित निशान लगाओ।



$$5 \text{ Rs} \quad \underline{\hspace{2cm}} \quad 1 \text{ Rs} + 1 \text{ Rs} + 1 \text{ Rs} + 1 \text{ Rs} + 1 \text{ Rs}$$

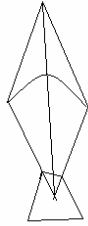
Ques.10 Ritu has 10 rupee note, Sia has 50 rupee note. Calculate the total money.

रितु के पास १० रुपये का नोट है तथा सिया के पास ५० रुपये का नोट है दोनों के पास कुल कितनी रकम है?



$$10 \text{ Rs} + 50 \text{ Rs} = \underline{\hspace{2cm}} \text{ Rs}$$

Ques.11



Guess the approx cost of the kite [5 Rs, 50 Rs, 100 Rs]

पतंग की कीमत का अनुमान लगाइए।

(५ रुपये, ५० रुपये, १०० रुपये)

Ques.12

$$\boxed{50 \text{ Rs}} + \bigcirc 2 \text{ Rs} + \bigcirc 2 \text{ Rs} + \bigcirc 1 \text{ Rs} = \underline{\hspace{2cm}}$$

Ques.13 Draw notes and coins of equal amount.

नोट तथा सिक्के बनाइए।

i)



=

ii)



=

Ques.14

Rani  
रानी

Seema  
सीमा

Total money  
कुल राशि

100 Rs

+

50 Rs

=

\_\_\_\_\_ Rs

Ques.15

$$\begin{array}{ccccccc} \boxed{50 \text{ Rs}} & = & \boxed{10 \text{ Rs}} & + & \boxed{10 \text{ Rs}} & + & \boxed{\phantom{00}} \\ & & & & & & \\ & & + & \boxed{\phantom{00}} & + & \boxed{\phantom{00}} & \end{array}$$

**ANSWERS**

- Ans.1 50 Paise coin  
५०
- Ans.2 10  
१०
- Ans.3 10, 2  
१०, २
- Ans.4 5  
५
- Ans.5 20, 10  
२०, १०
- Ans.6 50  
५०
- Ans.7 20  
२०
- Ans.8 <  
<
- Ans.9 =  
=
- Ans.10 60  
६०
- Ans.11 5 Rs  
५
- Ans.12 55  
५५
- Ans.13
- |     |              |                |                 |                |
|-----|--------------|----------------|-----------------|----------------|
| i)  | 20 Rs,<br>२० | 10 Rs,<br>१०   | 2 Rs coin,<br>२ | 1 Rs coin<br>१ |
| ii) | 20 Rs,<br>२० | 2 Rs coin<br>२ |                 |                |
- Ans.14 150  
१५०
- Ans.15 10, 10, 10  
१०, १०, १०