

FUN WITH FAMILY





With my family I love to



Eg.

go for picnics.



FOND MEMORIES WE CHERISH

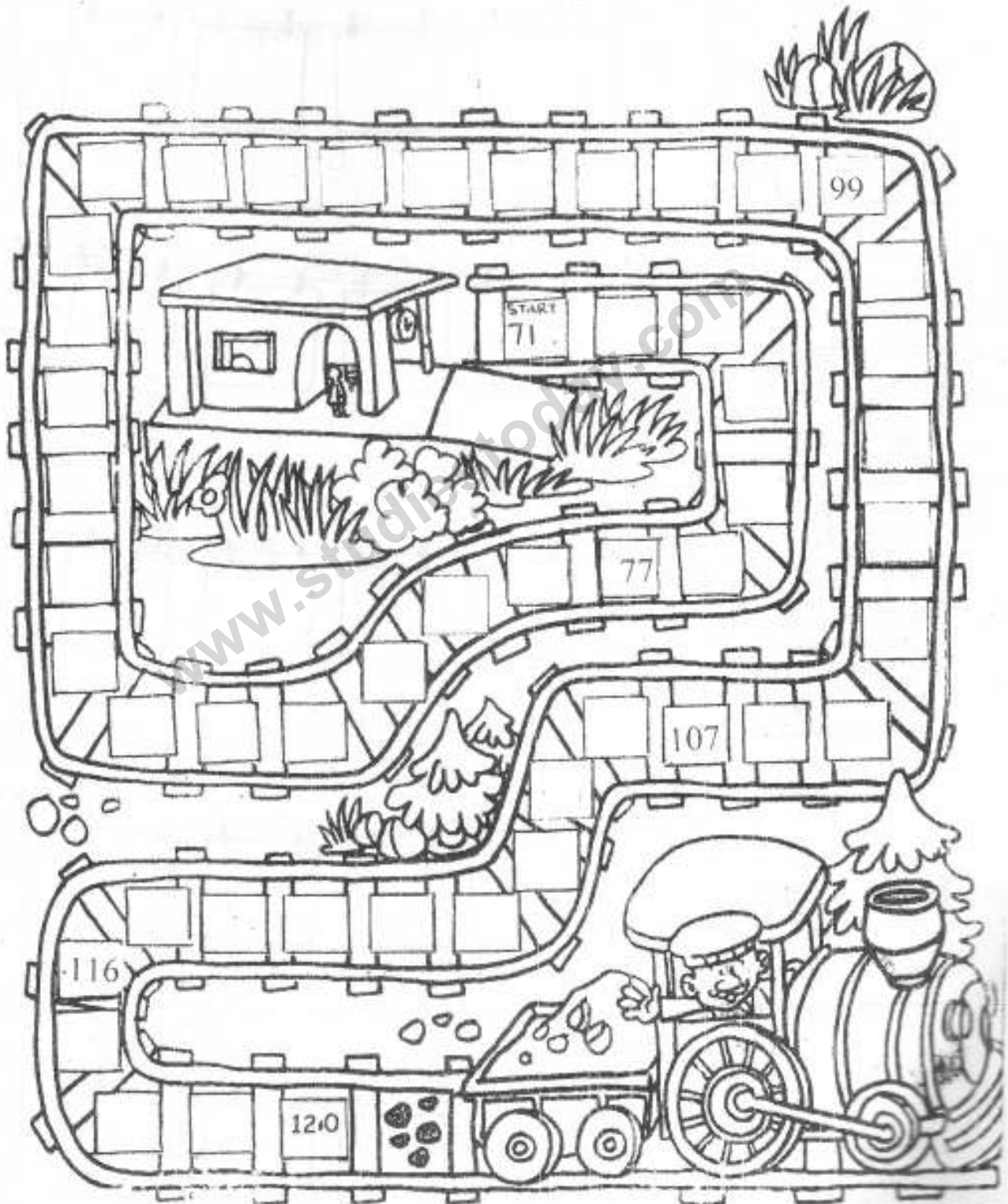


Make a collage of the memorable moments spent with family.

www.studiestoday.com

Counting

Complete the number track by filling in the missing numbers. (71 to 120)



Smallest to biggest

Help Roberta Robot put her wash in order.

Roberta Robot is washing clothes. The clothes are numbered and need to be put in order from smallest to biggest.

Row 1: Roberta Robot is washing clothes. The clothes are numbered 2, 4, 9, 7, 6. The clothes are hanging on a line. The first clothesline has 5 squares, the second has 5 squares, the third has 5 squares, the fourth has 5 squares, and the fifth has 5 squares.

Row 2: Roberta Robot is washing clothes. The clothes are numbered 25, 14, 19, 28, 20. The clothes are hanging on a line. The first clothesline has 5 squares, the second has 5 squares, the third has 5 squares, the fourth has 5 squares, and the fifth has 5 squares.

Row 3: Roberta Robot is washing clothes. The clothes are numbered 36, 47, 42, 44, 39. The clothes are hanging on a line. The first clothesline has 5 squares, the second has 5 squares, the third has 5 squares, the fourth has 5 squares, and the fifth has 5 squares.

Row 4: Roberta Robot is washing clothes. The clothes are numbered 11, 33, 44, 88, 66. The clothes are hanging on a line. The first clothesline has 5 squares, the second has 5 squares, the third has 5 squares, the fourth has 5 squares, and the fifth has 5 squares.

Row 5: Roberta Robot is washing clothes. The clothes are numbered 66, 81, 53, 94, 75. The clothes are hanging on a line. The first clothesline has 5 squares, the second has 5 squares, the third has 5 squares, the fourth has 5 squares, and the fifth has 5 squares.

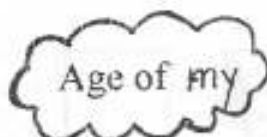


My Lucky number
Find your lucky number
by adding the digits in
your date of birth.



Eg. 5th Jan. 2002

$$5+1+2+0+0+2 = 10$$



- Father - _____
- Mother - _____
- Dada - _____
- Dadi - _____
- Brother - _____
- Sister - _____

Add / Subtract Dice

Count the dots on the dice.



 $+$
 $=$



 $+$

 $=$


1 + 2 + 3 =

$\begin{array}{|c|c|} \hline \bullet & \bullet \\ \hline \bullet & \bullet \\ \hline \end{array} - \begin{array}{|c|c|} \hline \bullet & \bullet \\ \hline \bullet & \bullet \\ \hline \end{array} = \begin{array}{|c|c|} \hline & \\ \hline & \\ \hline \end{array}$

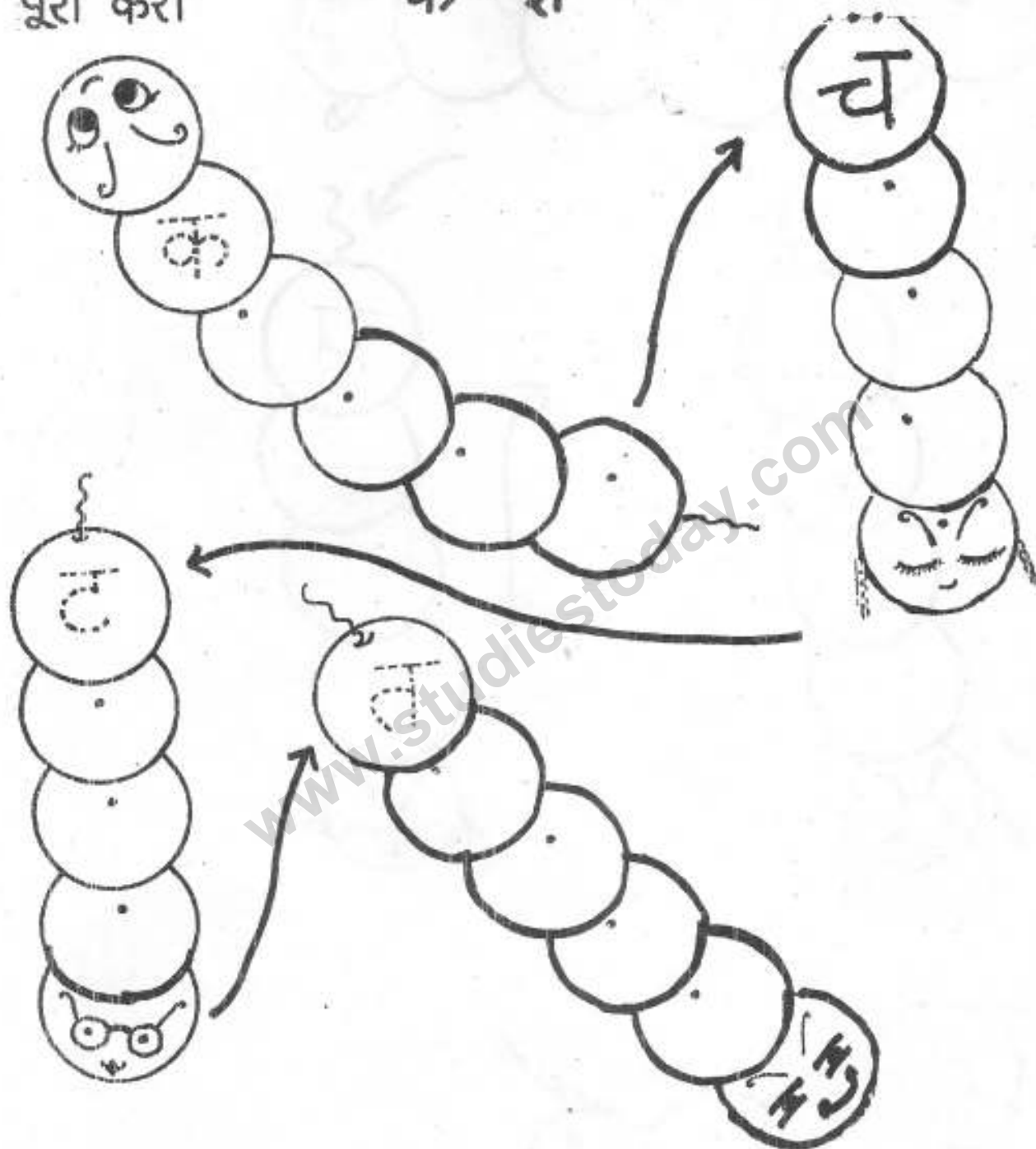
Make your own dice sums. You can roll real dice to help you.




HINDI

पूरा करौ

क - र







आओ खेलें



निर्देश : चित्र को देखकर शब्द सीढ़ी पूरी कीजिए :

... बटन ...



शब्द पहचानो और एक जैसे शब्द पर गोला लगाओ-

मटर	मगर	मटर
हाथ	हाथ	साथ
रात	सात	रात
बाघ	बाघ	बाल
नाव	नाव	नाग
जाला	ताला	जाला
माला	ताला	माला
सड़क	भड़क	सड़क
तबला	झबला	तबला



दिए गए वर्णों से दो-दो शब्द बनाओ-

